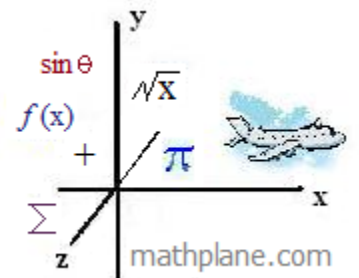


# 2014 Puzzle

(And, a solution)



2014

Using 2, 0, 1, 4, and any combination of math symbols/operations, write equations that compute to every number between 1 and 25.

solution: 5 minutes, 12 seconds

Note: Each digit must be used exactly once!

Examples:

$$\begin{aligned} 0 &= 0 \times 412 \\ &= 24^0 - 1 \end{aligned}$$

13

1

14

2

15

3

16

4

17

5

18

6

19

7

20

8

21

9

22

10

23

11

24

12

25

## 2 - 0 - 1 - 4 Hints

(Useful math operations/symbols)

factorials:

$$0! = 1$$

$$3! = 3 \times 2 \times 1 = 6$$

greatest integer function (floor function)

$$\lfloor 5.6 \rfloor = 5$$

least integer function (ceiling function)

$$\lceil 5.6 \rceil = 6$$

One SOLUTION ->

2014

Using 2, 0, 1, 4, and any combination of math symbols/operations, write equations that compute to every number between 1 and 25.

solution: 5 minutes, 12 seconds

Note: Each digit must be used exactly once!

Examples:

0	$= 0 \times 412$ $= 24^0 - 1$	13	$14 - 2^0$
1	$(214)^0$	14	$14 + (2 \times 0)$
2	$(\frac{4}{2} + 0) \times 1$	15	$20 - 4 - 1$ $4^2 - 1 + 0$
3	$(4 - 1) + (2 \times 0)$	16	$4^2 + (1 \times 0)$
4	$4 + (21 \times 0)$	17	$20 - 4 + 1$
5	$(1 + 4) - (2 \times 0)$ $\sqrt[4]{4} + 2 + 1 + 0$	18	$10 + (4 \times 2)$
6	$(2 + 4) \times 1 + 0$	19	$40 - 21$
7	$2 \times 4 - 1 + 0$ $0 + 1 + 2 + 4$	20	$\frac{10}{2} \times 4$ $20 \times 1^4$
8	$10 - \frac{4}{2}$	21	$21 + (4 \times 0)$
9	$(4 - 1)^2 + 0$ $4 + \frac{10}{2}$	22	$21 + 4^0$
10	$(0 + 1 + 2)! + 4$ $3! = 6$	23	$24 - 1 + 0$
11	$12 - 4^0$	24	$24 \times 1 + 0$
12	$12 + (4 \times 0)$	25	$(4 + 1)^2 + 0$ $21 + 0 + 4$

\*\*\*\*Challenge: Using the same rules, find equations that compute to 26 – 50.

2014

Part 2: Challenge

Using 2, 0, 1, 4, and any combination of math symbols/operations, write equations that compute to every number between 26 and 50.

Note: Each digit must be used exactly once!

Examples:

$$0 = 0 \times 412$$
$$= 24^0 - 1$$

38

26

39

27

40

28

41

29

42

30

43

31

44

32

45

33

46

34

47

35

48

36

49

37

50



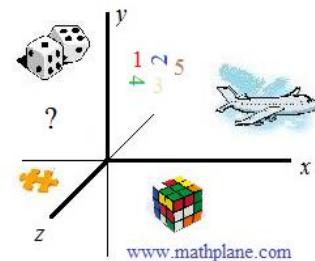
Challenge Solution ->

2014

Part 2: Challenge

Using 2, 0, 1, 4, and any combination of math symbols/operations, write equations that compute to every number between 26 and 50.

solution: 21 minutes, 30 seconds



Note: Each digit must be used exactly once!

Examples:

$$0 = 0 \times 412$$

$$= 24^0 - 1$$

$$26 \quad (4! + 2 + 0) \times 1 \quad 4! = 4 \times 3 \times 2 \times 1 = 24$$

$$27 \quad 4! + 2 + 1 + 0$$

$$28 \quad 2 \times 14 + 0$$

$$29 \quad 4! + \frac{10}{2}$$

$$30 \quad \frac{4}{.2} + 10 \quad \frac{4}{.2} = \frac{4}{(1/5)} = 20$$

$$31 \quad 4! + (2 + 1)! + 0! \quad 3! = 6 \quad 0! = 1$$

$$32 \quad 42 - 10$$

$$33 \quad 2^{(1+4)} + 0! \quad 2^5 = 32$$

$$34 \quad 24 + 10$$

$$35 \quad 40 - \frac{1}{.2}$$

$$36 \quad 12 \times (4 - 0!)$$

$$37 \quad 40 - 2 - 1$$

$$38 \quad 40 - 2^1$$

$$39 \quad 40 - 1^2 \quad 41 - 2 + 0$$

$$40 \quad 40 \times (2 - 1)$$

$$41 \quad 41 + (2 \times 0)$$

$$42 \quad 40 + 2^1 \quad 21 \times \sqrt[4]{4} + 0$$

$$43 \quad 41 + 2 + 0$$

$$44 \quad (21 + 0!) \times \sqrt{4}$$

$$45 \quad 4! + 21 + 0$$

$$46 \quad \frac{10}{.2} - 4$$

$$47 \quad (4! \times 2) - 1 - 0$$

$$48 \quad (4! \times 2) + (1 \times 0)$$

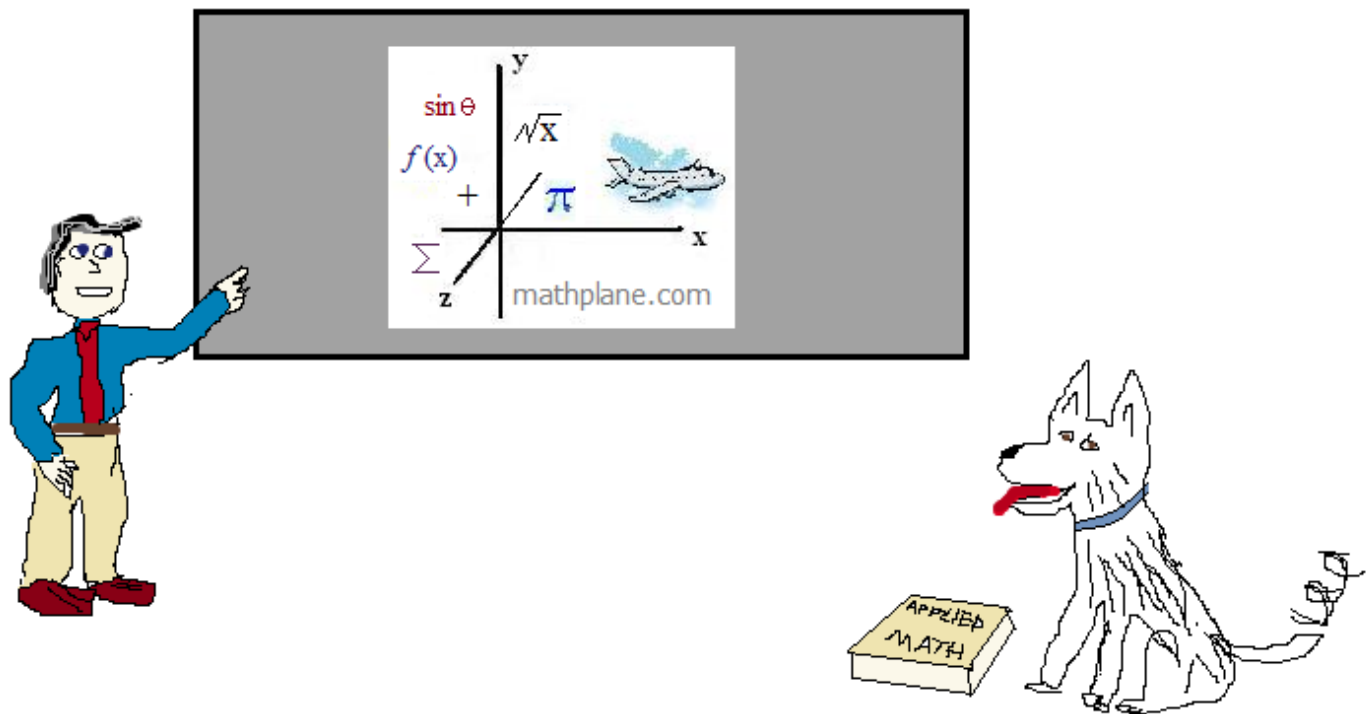
$$49 \quad (4! \times 2) + 1 + 0$$

$$50 \quad 2 \times (4! + 1) + 0$$

Thanks for visiting.

If you have questions, suggestions, or requests, let us know.

Enjoy!



Also, at Facebook, Google+, and TeachersPayTeachers.com